

# Pedro's String

Name: \_\_\_\_\_

Use a diagram to answer the question. Show your work.



Pedro had a piece of string.

Pedro gave Bill  $\frac{1}{3}$  of the string.

Pedro gave Jen  $\frac{1}{2}$  of the leftover string.

Pedro had 6 feet of string after giving pieces to Bill and Jen.

How long was the string before Pedro gave Bill and Jen pieces of it?




1 <sup>st</sup> Read	CONTEXT
	The problem is about _____.
2 <sup>nd</sup> Read	PURPOSE or QUESTION
	I need to _____.
3 <sup>rd</sup> Read	INFORMATION
	

DIAGRAM that helps you solve the problem (Show all the important INFORMATION)

ANSWER (use your DIAGRAM)

# Pedro's String - *with new values*

Name: \_\_\_\_\_

Use a diagram to answer the question.




Pedro had a piece of string.

Pedro gave Bill  of the string.

Pedro gave Jen  of the leftover string.

Pedro had  feet of string after giving pieces to Bill and Jen.

How long was the string before Pedro gave Bill and Jen pieces of it?

3 <sup>rd</sup> Read 	INFORMATION
DIAGRAM that helps you solve the problem. Show all the important INFORMATION.	
ANSWER	